

# Azaan International School

## Activity sheet VIII (2019-20)

Grade - I

Sec: \_\_\_\_\_

Subject- Math

Name: \_\_\_\_\_


Date: \_\_\_\_\_

### Chapter- 16. Multiplication Readiness

And


### 17. Mixed Problems

1. Find how many are there in all?



- How many pots are there? \_\_\_\_\_
- How many flowers are there in each pot? \_\_\_\_\_
- How many flowers are there in all? \_\_\_\_\_

2. Look at the picture given below then fill in the blanks.



a. \_\_\_\_\_ sets of chocolates.

b. \_\_\_\_\_ chocolates in each set.

There are \_\_\_\_\_ Chocolates in all.

### 3. Match the following

a.  $2+2+2+2+2$

A. 16

b.  $8+8+8$

B. 10

c.  $7+7$

C. 24

d.  $4+4+4+4$

D. 14

### 4. Draw small circles to add.

a.  $3+3+3=$  \_\_\_\_\_

b.  $4+4+4+4=$  \_\_\_\_\_

c.  $6+6=$  \_\_\_\_\_

### 5. Solve the following word problems by any method.

a. The teacher has 18 pencils .She gives 8 pencils to her students to write.  
How many pencils are left with teacher?

Number of pencils teacher has = \_\_\_\_\_

Number of pencils teacher gave to her students. = \_\_\_\_\_

Number of pencils left with teacher = \_\_\_\_\_

**b. Ali buys 10 candies .He has eaten 5 candies. How many candies are left now?**

$$\square - \square = \square$$

**c. There are 15 eggs in the basket and 10 eggs inside the fridge .How many eggs are there in all?**

Number of eggs in the basket = \_\_\_\_\_

Number of eggs in the fridge = \_\_\_\_\_

There are \_\_\_\_\_ eggs in all.

**d. In a game of Ludo , Sania wins 17 games on day 1 and 5 games on day 2.How many games does she win both the days?**

$$\square + \square = \square$$

# Azaan International School

## Activity sheet IX (2019-20)

Grade - I

Sec: \_\_\_\_\_

Subject- E.V.S

Name: \_\_\_\_\_

Date: \_\_\_\_\_

### Chapter-19: The World Around Us

I. Choose and write the correct words for the given pictures.

Ice      valley      plain      mountain      forest      water vapour



\_\_\_\_\_




\_\_\_\_\_




\_\_\_\_\_



\_\_\_\_\_



\_\_\_\_\_



\_\_\_\_\_

## II. How is the weather?



It is \_\_\_\_\_ ( cloudy / rainy )



It is \_\_\_\_\_( partly cloudy / rainy)



It is \_\_\_\_\_ ( rainy / windy)



It is \_\_\_\_\_( sunny / snowy)



It is \_\_\_\_\_ ( stormy/ rainy)

**III. Match the following.**

- |                                |                        |
|--------------------------------|------------------------|
| 1. We wear cotton clothes      | a. during the day..    |
| 2. I/we like to drink hot soup | b. in summer.          |
| 3. The sky is bright           | c. at night.           |
| 4. We see stars                | d. a big ball of fire. |
| 5. The sun is                  | e. in winter           |

**IV. Draw some heavenly bodies.**